



# **EDUCATION DAY**

## **FEBRUARY 11, 2020**

THIS BOOK BELONGS TO: \_\_\_\_\_

# WRITING

LEARN YOUR LETTERS OR PRACTICE CURSIVE

COLLEGE PARK

COLLEGE PARK

SKYHAWKS

SKYHAWKS

College Park Skyhawks

College Park Skyhawks

0 1 2 3 4 5 6 7 8 9

0 1 2 3 4 5 6 7 8 9


C O L L E G E P A R K

S K Y H A W K S


MATCH EACH COURT TO A JERSEY!

# COUNT AND MATCH

COUNT THE NUMBER OF BASKETBALLS ON EACH COURT  
AND MATCH WITH THE CORRECT JERSEY NUMBER.

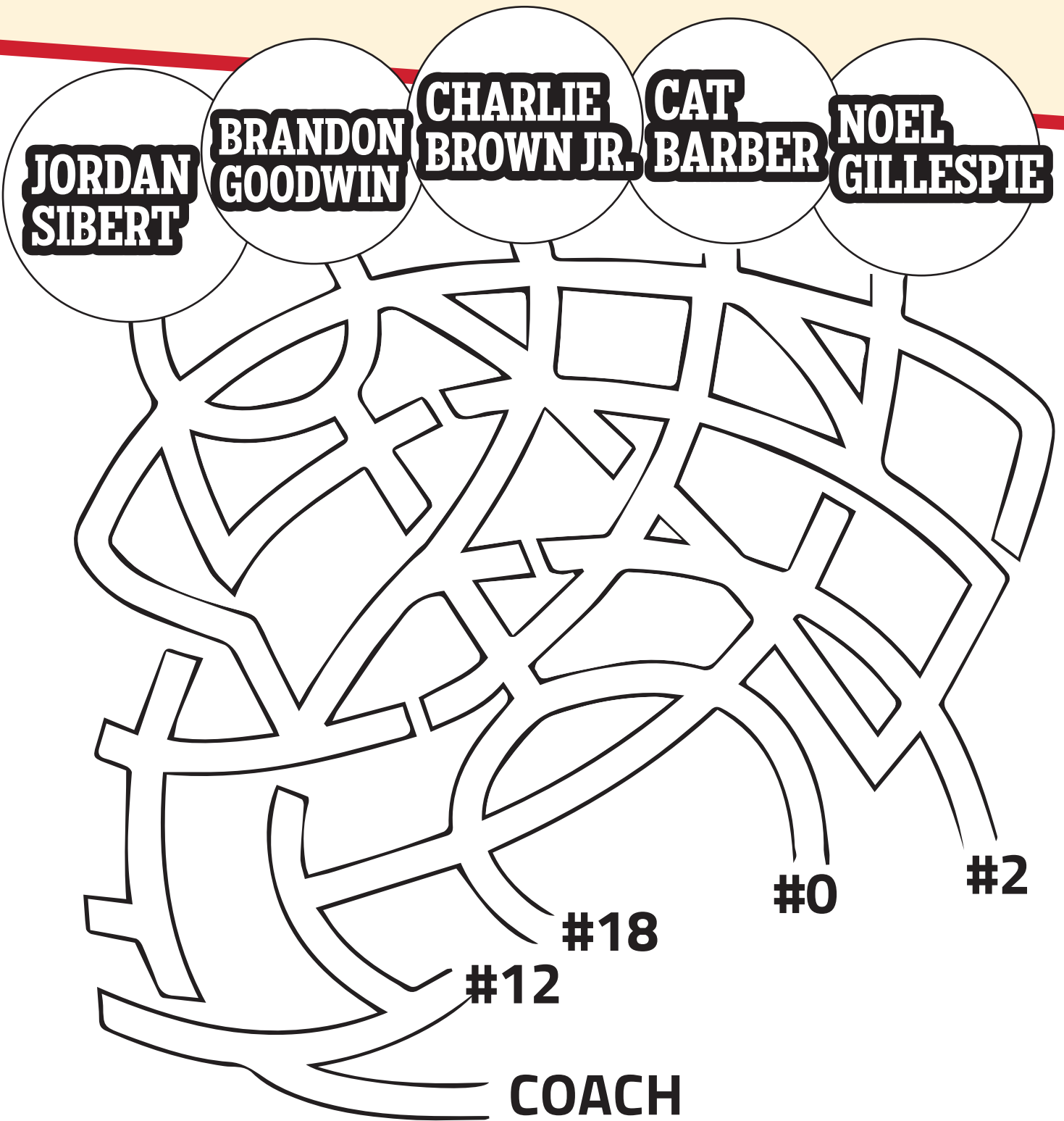


# COLOR COLLI



# WHICH WAY?

MATCH THE PLAYER TO THEIR NUMBER




# HELP COLLI CALCULATE HIS TOTALS

## MULTIPLICATION

# WHERE ARE OUR OPPONENTS FROM?

## MAP IT

	GEAR	AVERAGE PRICE
	JERSEY	\$44
	SHORTS	\$30
	BASKETBALL	\$12
	SOCKS	\$10
	SWEATBAND	\$6



 Austin Spurs = <input type="text"/>	 Maine Red Claws = <input type="text"/>	 South Bay Lakers = <input type="text"/>
 College Park Skyhawks = <input type="text"/>	 Memphis Hustle = <input type="text"/>	 Stockton Kings = <input type="text"/>
 Greensboro Swarm = <input type="text"/>	 Rio Grande Vipers = <input type="text"/>	 Windy City Bulls = <input type="text"/>
 Lakeland Magic = <input type="text"/>	 Salt Lake City Stars = <input type="text"/>	 Wisconsin Herd = <input type="text"/>

USE THE CHART ABOVE TO ANSWER THE FOLLOWING QUESTIONS.

1. IF COLLI BUYS 9 BASKETBALLS WHAT IS HIS TOTAL?
2. IF COLLI BUYS 3 PAIRS OF SHORTS AND 4 JERSEYS WHAT IS HIS TOTAL?
3. IF COLLI BUYS 5 SWEATBANDS WHAT IS HIS TOTAL?
4. IF COLLI BUYS 2 JERSEYS, 4 SWEATBANDS, AND 3 BASKETBALLS WHAT IS HIS TOTAL?
5. IF COLLI BUYS 8 PAIRS OF SOCKS AND 4 PAIRS OF SHORTS WHAT IS HIS TOTAL?



CAN YOU FIND THEM?

# 10 DIFFERENCES



# MEET THE TEAM

CAN YOU NAME ALL THE PLAYERS?



**NOEL GILLESPIE**  
Head Coach



**CALBERT CHEANEY**  
Assistant Coach



**MFON UDOFIA**  
Assistant Coach



**THERIAN WILLIAMS**  
Assistant Coach



**BRANDON GOODWIN**  
#0



**ARMONI BROOKS**  
#1



**CHARLIE BROWN JR.**  
#2



**TAHJERE MCCALL**  
#6



**MARCUS DERRICKSON**  
#7



**PHILIP COFER**  
#8



**CAT BARBER**  
#12



**SANJAY LUMPKIN**  
#13



**JORDAN SIBERT**  
#18



**KENNY GABRIEL**  
#32



**MARK OGDEN JR.**  
#35



**NICK WARD**  
#44

LEARN ABOUT TODAY'S GAME

TODAY'S LINEUP

PLAYER NAME	#	POSITION	HEIGHT	WEIGHT	COLLEGE

1. WHAT TIME DOES THE GAME START?

2. WHO IS THE OPPOSING TEAM'S NBA AFFILIATE?

3. WHAT IS THE OPPOSING TEAM'S MASCOT?

4. WHERE IS THE OPPOSING TEAM FROM?
5. WHAT IS THE SCORE AT HALFTIME?

6. WHAT IS THE FINAL SCORE?

7. WHICH SKYHAWKS PLAYER SCORED THE MOST?

8. WHICH SKYHAWKS PLAYER HAD THE MOST REBOUNDS? MOST ASSISTS?

WORD SEARCH

FIND COLLI'S FAVORITE BASKETBALL WORDS

ATLANTA      DUNK      G LEAGUE      NBA      SWISH

BACKBOARD      FOUL      GUARD      NET      TIMEOUT

BASKETBALL      FOUL LINE      HOOPS      PARK      TIPOFF

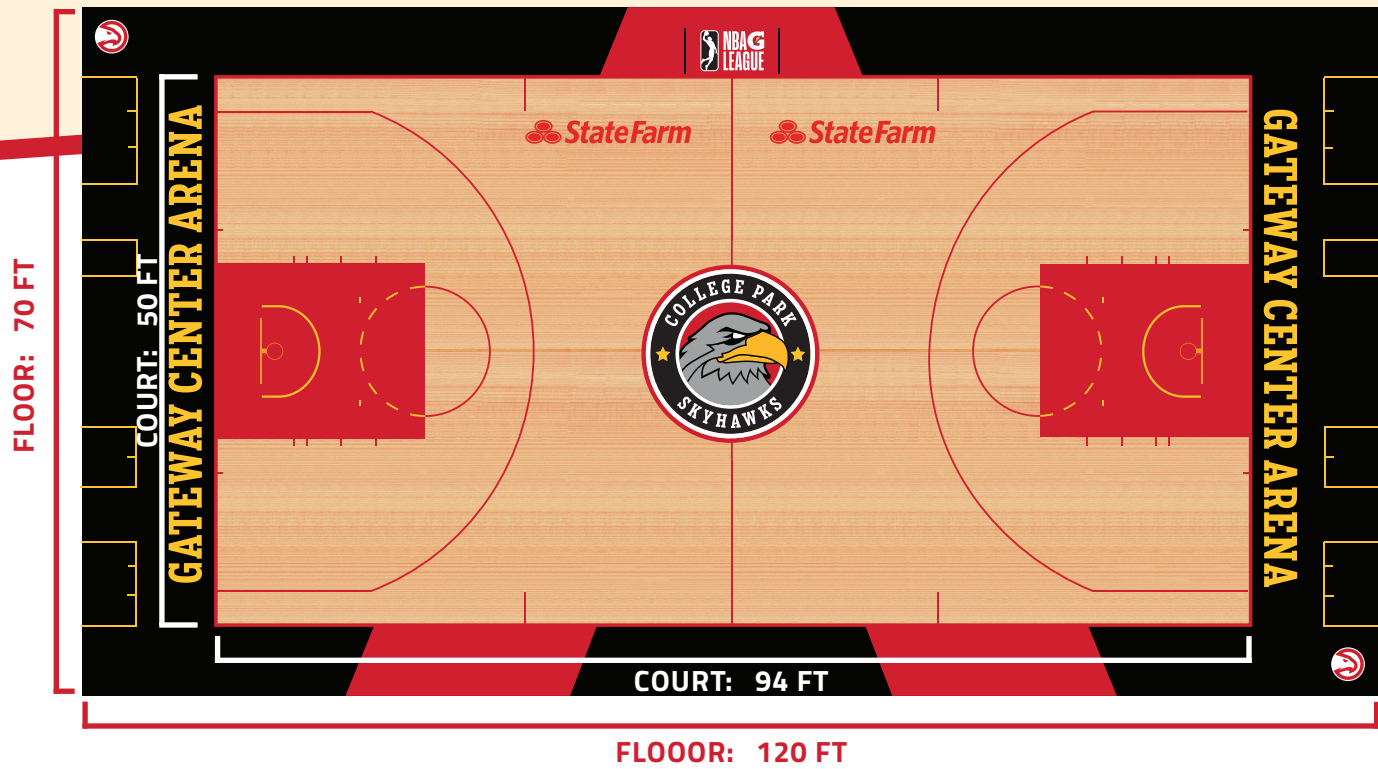
CENTER      GATEWAY      JUMP      REBOUND      TRAVEL

COLLEGE      GEORGIA      LAYUP      SKYHAWKS      TURNOVER

B	A	C	K	B	O	A	R	D	R	T	L	U	O	F
C	F	A	L	P	A	G	O	S	E	U	X	S	S	M
B	L	O	U	E	E	C	K	W	V	O	K	N	D	F
V	A	Y	E	O	V	W	L	I	O	E	M	N	N	J
G	A	S	R	N	A	A	I	S	N	M	M	V	U	Z
L	U	G	K	H	I	A	R	H	R	I	T	L	N	D
I	I	A	Y	E	M	L	T	T	U	T	X	Y	G	J
A	D	K	R	P	T	D	L	L	T	Y	M	C	L	H
N	S	E	E	D	H	B	F	U	A	N	E	V	E	F
E	G	E	L	L	O	C	A	W	O	N	E	N	A	M
R	E	B	O	U	N	D	E	L	T	F	T	T	G	F
F	F	O	P	I	T	T	K	E	L	J	S	A	U	Y
W	U	A	Y	I	A	N	R	N	U	Z	R	Y	E	V
P	T	R	P	G	T	B	A	M	H	O	O	P	S	F
Y	F	U	J	K	L	A	P	J	I	Y	R	B	F	G

A FLEET OF HOW MANY FEET?

AREA PROBLEMS



USE THE DIMENSIONS OF THE G LEAGUE COURT TO ANSWER THE QUESTIONS BELOW.

1. IF THE ABOVE COURT HAS THE DIMENSIONS AS SHOWN, WHAT IS ITS PERIMETER?

A. 4700 FT

B. 288 FT

C. 282 FT

D. 144 FT
2. IF THE ABOVE COURT HAS THE DIMENSIONS AS SHOWN, WHAT IS ITS AREA?

A. 4700 FT

B. 288 FT

C. 282 FT

D. 144 FT
3. IF THE ABOVE FLOOR HAS THE DIMENSIONS AS SHOWN, WHAT IS ITS PERIMETER?

A. 240 FT

B. 190 FT

C. 8400 FT

D. 380 FT
4. IF THE ABOVE FLOOR HAS THE DIMENSIONS AS SHOWN, WHAT IS ITS AREA?

A. 240 FT

B. 190 FT

C. 8400 FT

D. 380 FT

COMPLETE THE IMAGE AND STORY

GRAPHS & GRAMMAR

PLOT THE POINTS ON THE GRAPH TO THE RIGHT AND THEN CONNECT THE DOTS IN ALPHABETICAL ORDER.

- A. (-9.5,0)

B. (-8,1)

C. (-7,3)

D. (-8,3)

E. (-1,8)

F. (6,5)

G. (5,4)

H. (8,2)

I. (9,0)
- J. (8,-4)

K. (8,-2)

L. (7,-2)

M. (5,-2)

N. (6,-4)

O. (4,-3)

P. (4,-5)

Q. (3,-3)

R. (2,-6)
- S. (1,-4)

T. (0,-6)

U. (-1,-4)

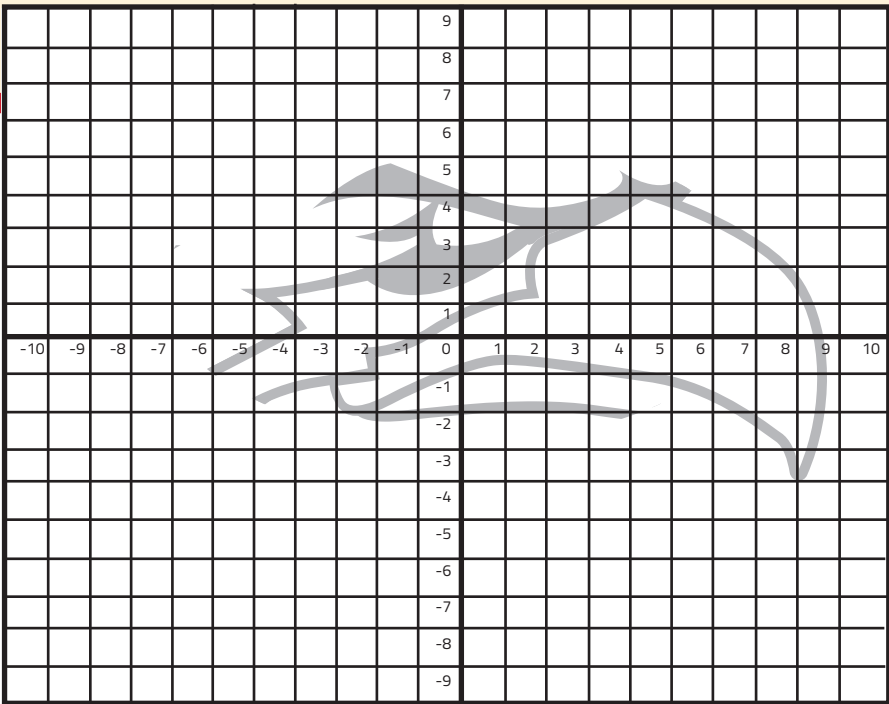
V. (-3,-5)

W. (-3,-3)

X. (-6,-5)

Y. (-5,-2)

Z. (-8,-6)




This is \_\_\_\_\_, speaking to you from the broadcasting \_\_\_\_\_  
PERSON IN ROOM NOUN  
at the \_\_\_\_\_ arena. In case you \_\_\_\_\_ in late, the score between the  
ADJECTIVE VERB (PAST TENSE)  
Savannah \_\_\_\_\_ and the College Park Skyhawks is a squeaker, 155 to \_\_\_\_\_.  
PLURAL NOUN NUMBER  
This has been the most \_\_\_\_\_ game these \_\_\_\_\_ eyes have seen  
ADJECTIVE ADJECTIVE  
in decades. First, one team scores a \_\_\_\_\_, then \_\_\_\_\_! -the other  
NOUN EXCLAMATION  
team comes right back. Okay, Time-out is over. The College Park Skyhawks bring in the ball at mid-\_\_\_\_\_  
NOUN  
\_\_\_\_\_. \_\_\_\_\_ dribbles down the \_\_\_\_\_, fakes the defender  
PERSON IN ROOM NOUN  
out of his \_\_\_\_\_ and shoots a \_\_\_\_\_ - handed shot. It goes right  
NOUN NUMBER  
through the \_\_\_\_\_. He beat the \_\_\_\_\_.! The game is over as the  
NOUN NOUN  
\_\_\_\_\_ goes off! What a(n) \_\_\_\_\_ game!  
NOUN ADJECTIVE



CROSSWORD

DO YOU KNOW BASKETBALL LIKE A PRO?



- Across**
  - When a player close to the basket jumps and forcefully throws the ball down into the net.
  - A member of an athletic team in his or her first full season in that sport.
  - Also called endlines.
  - A high pass caught by a leaping teammate who tries to dunk the ball before landing.
  - Who is the College Park Skyhawks' mascot?
  - When a player holding the ball moves one or both of their feet illegally, they are doing what?
  - As of the 2019–20 season, the G League consists of how many teams?
  - A two-point shot attempt made by leaping from below, laying the ball up near the basket, and using one hand to bounce it off
- Down**
  - The act of bouncing a basketball continuously.
  - The rectangular piece of wood or fiberglass that the rim attaches to.
  - An official who enforces the rules and maintains order in the game.
  - James Naismith invented basketball in 1891 at the International YMCA Training School in what state?
  - A pause in the game, allowing the coaches of either team to communicate with the players.
  - A penalty in which a player or coach is immediately removed from the game as a result of one of a few serious offenses.
  - A pass to another basketball player that leads directly to a made basket.
  - In NBA and G-League basketball games, there are 4 quarters consisting of how many minutes per quarter?
  - A National Basketball Association's official minor league basketball affiliate.

READY FOR COLLEGE?

RECEIVE A FREE TICKET IF YOU HAVE BINGO BY MARCH 1ST.  
SEND ITEMS TO RAVEN WARD AT [RAVEN.WARD@CPSKYHAWKS.COM](mailto:RAVEN.WARD@CPSKYHAWKS.COM)

COLLEGE PREP BINGO

ACT	COLLEGE FAIR	AP COURSE	COMMUNITY SERVICE	RESUME
DUAL ENROLLMENT	GRANT APPLICATION	ORDERED CAP / GOWN	SAT	FAFSA
MAJOR	TRANSCRIPT	FREE	COLLEGE VISIT	COLLEGE FAIR
COMMUNITY SERVICE	ORIENTATION	GPA ABOVE 3.5/4.0	SCHOLARSHIP APPLICATION	ACCEPTANCE LETTER
COLLEGE VISIT	SAT/ACT	DORM	MINOR	FOUND ROOMMATE





# SKYHAWKS YOUTH BASKETBALL

## JOIN US THIS MARCH AT COLLI HOOPS!

Led by College Park Skyhawks youth basketball coaches, our camp will focus on fundamentals, enhancing skills and promoting teamwork. Open to children in grades age 1st - 8th.

SIGN UP TO BE NOTIFIED WHEN DATES ARE ANNOUNCED:  
[CPSKYHAWKS.COM/YOUTHBASKETBALL](https://cpskyhawks.com/youthbasketball)



### EXPLORE



### LEARN



### PLAY

USE THIS LINK FOR  
DISCOUNTED TICKETS  
AND ATTRACTIONS  
FOR THE  
GEORGIA AQUARIUM

[GEORGIAAQUARIUM.ORG/  
ANYTIMETICKETATL](https://georgiaaquarium.org/anytimeticketatl)



(404) 581-4000


225 Baker St NW  
Atlanta, GA 30313

[georgiaaquarium.org](https://georgiaaquarium.org)







# SKYHAWKS



## ANSWERS



- $9 \times 12 = 86$
- $(30 \times 3) + (4 \times 44) = 266$
- $5 \times 6 = 30$
- $(2 \times 44) + (4 \times 6) + (3 \times 12) = 148$
- $(8 \times 10) + (4 \times 30) = 200$



- IF THE ABOVE COURT HAS THE DIMENSIONS AS SHOWN, WHAT IS ITS PERIMETER?  
A. 4700 FT B. 288 FT C. 282 FT D. 144 FT
- IF THE ABOVE COURT HAS THE DIMENSIONS AS SHOWN, WHAT IS ITS AREA?  
A. 4700 FT B. 288 FT C. 282 FT D. 144 FT
- IF THE ABOVE FLOOR HAS THE DIMENSIONS AS SHOWN, WHAT IS ITS PERIMETER?  
A. 240 FT B. 190 FT C. 8400 FT D. 380 FT
- IF THE ABOVE FLOOR HAS THE DIMENSIONS AS SHOWN, WHAT IS ITS AREA?  
A. 240 FT B. 190 FT C. 8400 FT D. 380 FT

- Austin Spurs = 5
- CP Skyhawks = 7
- Greensboro Swarm = 12
- Lakeland Magic = 9
- Maine Red Claws = 11
- Memphis Hustle = 1
- Rio Grande Vipers = 5
- Salt Lake City Stars = 8
- South Bay Lakers = 3
- Stockton Kings = 2
- Windy City Bulls = 10
- Wisconsin Herd = 6

